

How many fingers are being shown?



How many counters are in the ten-frame?



Oh no! Teddy had 1 balloon but it popped. How many balloons does he have left?



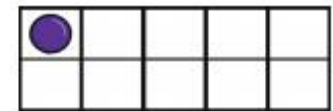
Teddy's friends were very hungry! How many cakes are left on the plate?



How many fingers are being shown?



How many counters are in the ten-frame?



How many elephants can you see?



How many cars can you see?

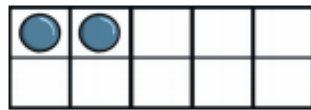




How many fingers are being shown?





How many counters are in the ten-frame?



How many cats can you see?



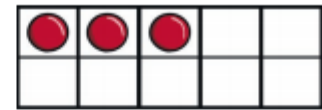
How many apples can you see?



How many fingers are being shown?



How many counters are in the ten-frame?



How many boats can you see?

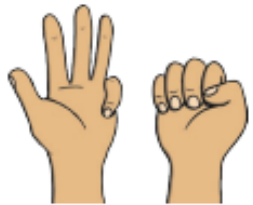


How many dogs are there?

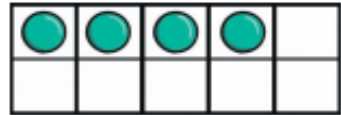




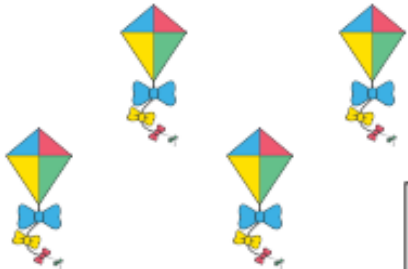
How many fingers are being shown?



How many counters are in the ten-frame?



How many kites are there?



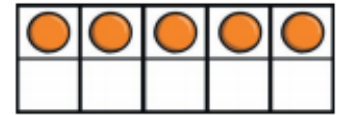
How many mice can you see?



How many fingers are being shown?



How many counters are in the ten-frame?




How many teddy bears are there?



How many bees can you see?





How many fingers are being shown?



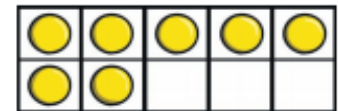
How many counters are in the ten-frame?



How many fingers are being shown?




How many counters are in the ten-frame?



How many bananas are there?



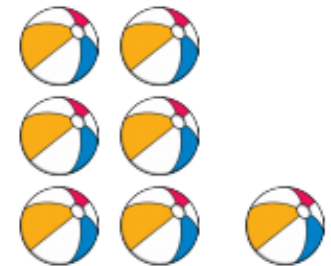
How many monkeys can you see?

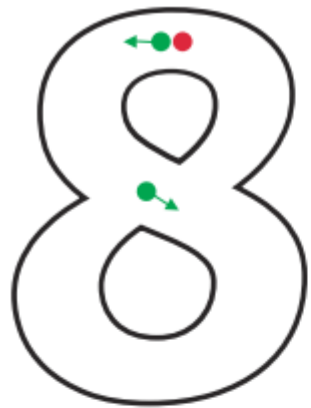


How many rabbits can you see?



How many balls are there?






How many fingers are being shown?



How many counters are in the ten-frame?



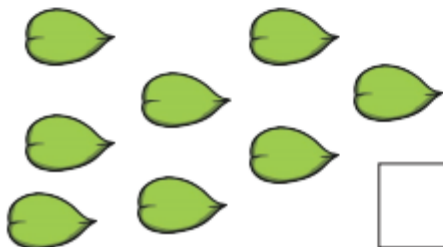
How many fingers are being shown?



How many counters are in the ten-frame?



How many leaves can you see?



How many ladybirds are there?




How many balloons can you see?



How many cakes are there?

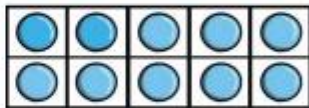




How many fingers are being shown?



How many counters are in the ten-frame?



How many sandcastles can you see?



How many frogs are there?

